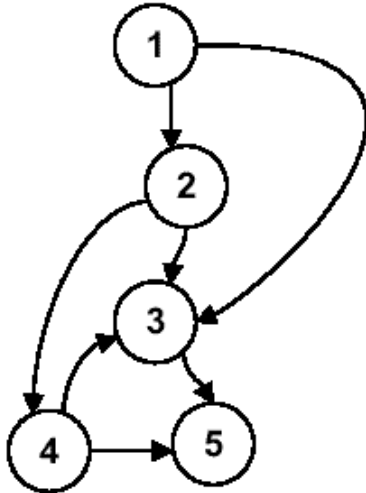


# Information System Design (U08182)

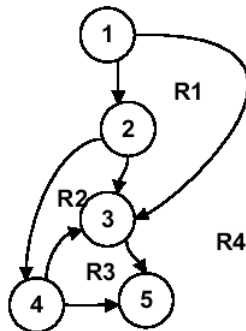
## Tutorial Exercise 9

1. Consider the following flow graph.



- A) Copy the diagram into your answer sheet, and based on this flowgraph, derive the value of  $V(G)$ . Show all three methods of calculation, with full working.

Regions method:  $V(G) = \text{no. of distinct regions} = R1 \text{ to } R4 = 4$



$V(G) = \text{predicate nodes} + 1 = \text{Predicate nodes } (1, 2, 4) + 1 = 3 + 1 = 4$

$V(G) = \text{edges} - \text{nodes} + 2 = 7 \text{ edges} - 5 \text{ nodes} + 2 = 4$

- B) Based on this value of  $V(G)$ , derive the basis set of test paths.

Path 1: 1-3-5

Path 2: 1-2-3-5

Path 3: 1-2-4-5

Path 4: 1-2-4-3-5

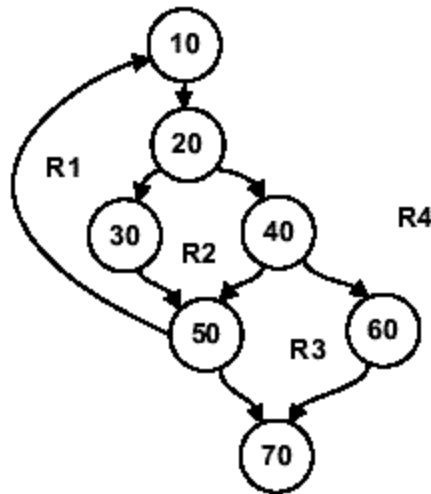
2. Consider the following section of code:

```

10 Print "Hello"
20 If Condition C1 is true, then GOTO 30; Else GOTO 40
30 Accept Input; then GOTO 50
40 If Condition C2 is true, then GOTO 50; Else GOTO 60
50 While Condition C3 is true, GOTO 10; Else GOTO 70
60 Accept Input; then GOTO 70
70 Print "End of program"

```

A) Draw a labeled flow graph for the above source code.



B) Based on the Basis Path Testing technique, calculate the value of cyclomatic complexity using all three methods of calculation. Ensure that all working is clearly shown for the three methods (e.g. predicate nodes and regions clearly highlighted).

The Value of  $V(G)$

$$V(G) = \text{no. of regions} = R1 \text{ to } R4 = 4$$

$$V(G) = \text{no. of Predicate nodes} + 1 = P(20, 40, 50) + 1 = 3 + 1 = 4$$

$$V(G) = E - N + 2 = 9 - 7 + 2 = 4$$

C) Based on the value of cyclomatic complexity calculated, derive the set of basis test paths.

Therefore there are 4 basic paths.

10-20-30-50-70

10-20-30-50-10-20-30-50-70

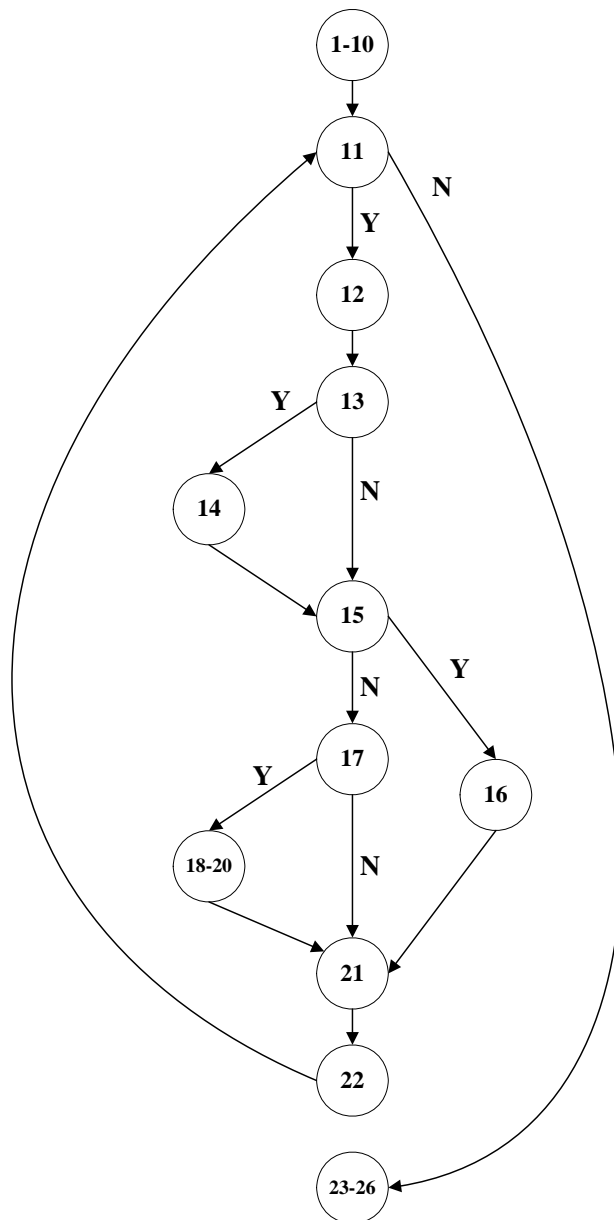
10-20-40-50-70

10-20-40-60-70

3. Consider the following program segment,

```
1.  #define YES 1
2.  #define NO 0
3.  void main(void)
4.  {
5.      int c, nl, nw, nc, inword;
6.      inword = NO;
7.      nl = 0;
8.      nw = 0;
9.      nc = 0;
10.     c = getchar( );
11.     while (c != EOF) {
12.         nc = nc + 1;
13.         if (c == '\n')
14.             nl = nl + 1;
15.         if (c == ' ' || c == '\n' || c == '\t')
16.             inword = NO;
17.         else if (inword == NO) {
18.             inword = YES;
19.             nw = nw + 1;
20.         }
21.         c = getchar( );
22.     }
23.     printf("%d\n", nl);
24.     printf("%d\n", nw);
25.     printf("%d\n", nc);
26. }
```

A) Draw the Flow Graph.



B) Calculate the McCabe's Cyclomatic Number  $V(G)$  to find out the total number of independent path.

$$V(G) = e - n + 2p$$

$$\text{In this graph, } V(G) = 15 - 12 + 2 = 5$$

C) Identify each Independent Path.

Path 1: 1-10, 11, 12, 13, 15, 17, 21, 22, 11, 23-26

Path 2: 1-10, 11, 23-26

Path 3: 1-10, 11, 12, 13, 14, 15, 17, 21, 22, 11, 23-26

Path 4: 1-10, 11, 12, 13, 15, 16, 21, 22, 11, 23-26